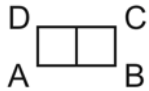


Paper Pool Tables

NAME _____

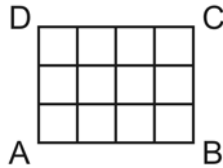
On each of the pool tables below, a ball is hit from pocket A at a 45° angle. Determine the pocket (A, B, C, or D) in which the ball will eventually land, the number of hits that occur, and the dimensions of the table.



Pocket: _____

Hits: _____

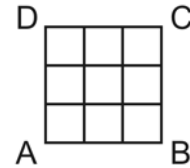
Dimensions: _____



Pocket: _____

Hits: _____

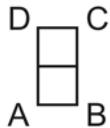
Dimensions: _____



Pocket: _____

Hits: _____

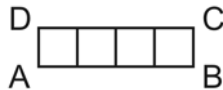
Dimensions: _____



Pocket: _____

Hits: _____

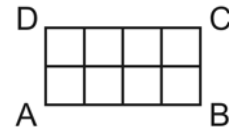
Dimensions: _____



Pocket: _____

Hits: _____

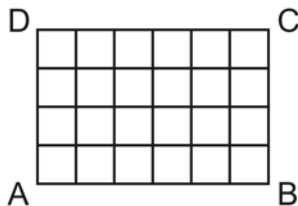
Dimensions: _____



Pocket: _____

Hits: _____

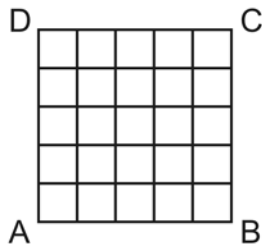
Dimensions: _____



Pocket: _____

Hits: _____

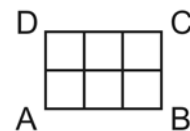
Dimensions: _____



Pocket: _____

Hits: _____

Dimensions: _____



Pocket: _____

Hits: _____

Dimensions: _____

