


What Changes, What Stays the Same?


NAME _____

Using these squares and circles, determine what stays the same when the sizes change. Using two different units of measurement, give two sets of measurements for each shape.




Side = _____
Perimeter = _____

Side = _____
Perimeter = _____



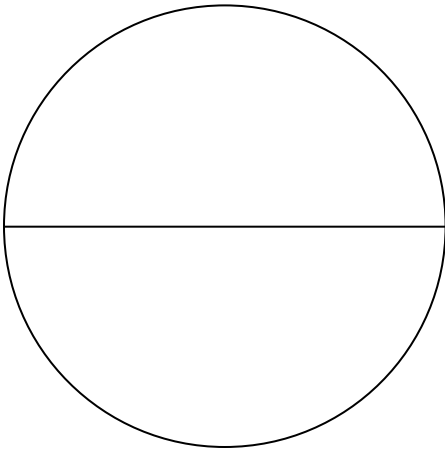
Side = _____
Perimeter = _____

Side = _____
Perimeter = _____




Side = _____
Perimeter = _____

Side = _____
Perimeter = _____




Diameter = _____
Circumference = _____

Diameter = _____
Circumference = _____



Diameter = _____
Circumference = _____

Diameter = _____
Circumference = _____



Diameter = _____
Circumference = _____

Diameter = _____
Circumference = _____