






















Name Your Tune










NAME _____









Examine the graphs and use them to answer the questions on the following page.

Music Store's October Sales

ROCK MUSIC								
CD								
RECORD								
TAPE								

POP MUSIC								
CD								
RECORD								
TAPE								

COUNTRY MUSIC								
CD								
RECORD								
TAPE								

CLASSICAL MUSIC								
CD								
RECORD								
TAPE								

Each  Represents 10 Units Sold

1. How are the graphs similar? Different? _____

2. Are tapes more or less popular than records or CDs? _____

3. Were more rock tapes sold than country-music tapes? _____

4. How many CDs were sold in all? _____

5. Are tapes, CDs, or records most popular? _____

Explain your answer. _____

6. Which type of music is most popular? _____

How do you know? _____

7. Write and answer at least two questions, based on the information about the store's sales.

8. What are some reasons for the variations in the popularity of CDs, tapes, and records?

