


# Region Relationships


NAME \_\_\_\_\_

*Use two yellow hexagons as the whole.*


1. The yellow hexagon  is what part of the whole?

2. The red trapezoid  is what part of the whole?

3. The blue rhombus  is what part of the whole?

4. The green triangle  is what part of the whole?

*Use three yellow hexagons as the whole.*


1. The yellow hexagon  is what part of the whole?

2. The red trapezoid  is what part of the whole?

3. The blue rhombus  is what part of the whole?

4. The green triangle  is what part of the whole?

Use four yellow hexagons as the whole.



1. The yellow hexagon is what part of the whole?



2. The red trapezoid is what part of the whole?



3. The blue rhombus is what part of the whole?



4. The green triangle is what part of the whole?