



Region Relationships



NAME _____

1. How many green triangles  are in one blue rhombus  ?

2. How many green triangles  are in one red trapezoid  ?

3. How many green triangles  are in one yellow hexagon  ?

4. How many blue rhombuses  are in one yellow hexagon  ?

5. How many red trapezoids  are in one yellow hexagon  ?