






Region Relationships



NAME _____



1. How many green triangles  are in one blue rhombus  ?

The green triangle  is what fraction of the blue rhombus  ?



2. How many green triangles  are in one red trapezoid  ?



The green triangle  is what fraction of the red trapezoid  ?



3. How many green triangles  are in one yellow hexagon  ?

The green triangle  is what fraction of the yellow hexagon  ?

4. How many blue rhombuses  are in one yellow hexagon  ?

The blue rhombus  is what fraction of the yellow hexagon  ?

5. How many red trapezoids  are in one yellow hexagon  ?

The red trapezoid  is what fraction of the yellow hexagon  ?